





# Treasure Island

Challenge:	Answer:
<ul style="list-style-type: none"> <li>- Start at C4 and have the BeeBot facing south</li> <li>- Enter the following code into the BeeBot ↑↑←↑</li> <li>- Press Go</li> <li>- What is the coordinate of where the BeeBot stops?</li> </ul>	
<ul style="list-style-type: none"> <li>- Start at D3 and have the BeeBot facing west.</li> <li>- Move one place forward.</li> <li>- Turn south and move forward two places</li> <li>- What is on the eastern side of the BeeBot?</li> </ul>	
<ul style="list-style-type: none"> <li>- Start at C2</li> <li>- Move two places in the west direction</li> <li>- Turn the Beebot to face north and move forward two places</li> <li>- What are the coordinates of the BeeBot?</li> </ul>	
<ul style="list-style-type: none"> <li>- Start at B1</li> <li>- Turn east and move forward one place</li> <li>- Turn the BeeBot north and move forward three places</li> <li>- What is on the eastern side of the BeeBot?</li> </ul>	
<ul style="list-style-type: none"> <li>- Start the Beebot in A4</li> <li>- Have the Beebot travel south two places</li> <li>- Turn the BeeBot east and move forward two places</li> <li>- Turn the BeeBot north and move forward one place</li> <li>- Turn the BeeBot east and move forward one place</li> <li>- Where is the BeeBot and what is the coordinate?</li> </ul>	